

Name:

Weekly Math Review - Q3:1

Date:

Monday	Tuesday	Wednesday	Thursday																																																																																					
<p>Put the number cards in order from least to greatest.</p> <div style="display: flex; justify-content: space-around; align-items: center;"> <div style="border: 1px solid black; border-radius: 10px; padding: 5px; margin: 5px;">97</div> <div style="border: 1px solid black; border-radius: 10px; padding: 5px; margin: 5px;">101</div> <div style="border: 1px solid black; border-radius: 10px; padding: 5px; margin: 5px;">99</div> <div style="border: 1px solid black; border-radius: 10px; padding: 5px; margin: 5px;">100</div> </div> <p>_____</p>	<p>Fill in the missing numbers on the number line.</p> <div style="text-align: center;"> <p>37 38 39 42</p> </div>	<p>Put the number cards in order from greatest to least.</p> <div style="display: flex; justify-content: space-around; align-items: center;"> <div style="border: 1px solid black; border-radius: 10px; padding: 5px; margin: 5px;">68</div> <div style="border: 1px solid black; border-radius: 10px; padding: 5px; margin: 5px;">54</div> <div style="border: 1px solid black; border-radius: 10px; padding: 5px; margin: 5px;">38</div> <div style="border: 1px solid black; border-radius: 10px; padding: 5px; margin: 5px;">71</div> </div> <p>_____</p>	<p>Fill in the missing numbers.</p> <p>107, 108, 109, _____, _____</p> <p>_____, 33, _____, 35, 36</p>																																																																																					
<p>Which shape doesn't belong?</p> <div style="display: flex; justify-content: space-around; align-items: center;"> </div> <div style="display: flex; justify-content: space-around; align-items: center;"> </div>	<p>Draw a shape using two rectangles.</p>	<p>Draw a circle. How many straight sides? How many corners?</p> <p>Sides _____ Corners _____</p>	<p>There are four pieces. What is each piece called?</p> <div style="text-align: center;"> </div>																																																																																					
<p>How many cubes long is the rope?</p> <div style="display: flex; align-items: center;"> </div>	<p>Circle the longest rope.</p> <div style="display: flex; align-items: center;"> </div>	<p>Which piece of rope is 7 blocks long?</p> <div style="display: flex; align-items: center;"> </div>	<p>Order the ropes from shortest to longest.</p> <div style="display: flex; align-items: center;"> </div>																																																																																					
<p>What time is it?</p> <div style="text-align: center;"> <p>6:30</p> </div>	<p>Draw the hands on the clock to show 12:00.</p> <div style="text-align: center;"> </div>	<p>What time is it?</p> <div style="text-align: center;"> <p>8:00</p> </div>	<p>Draw the hands on the clock to show 6:30.</p> <div style="text-align: center;"> </div>																																																																																					
<p>Tally how many kids voted for each color.</p> <p>Red Blue Green Yellow</p> <p>6 8 5 3</p> <table border="1" style="width: 100%; text-align: center;"> <thead> <tr> <th colspan="4">Tally Chart</th> </tr> <tr> <th>Red</th> <th>Blue</th> <th>Green</th> <th>Yellow</th> </tr> </thead> <tbody> <tr><td> </td><td> </td><td> </td><td> </td></tr> <tr><td> </td><td> </td><td> </td><td> </td></tr> <tr><td> </td><td> </td><td> </td><td> </td></tr> <tr><td> </td><td> </td><td> </td><td> </td></tr> <tr><td> </td><td> </td><td> </td><td> </td></tr> <tr><td> </td><td> </td><td> </td><td> </td></tr> <tr><td> </td><td> </td><td> </td><td> </td></tr> <tr><td> </td><td> </td><td> </td><td> </td></tr> </tbody> </table>	Tally Chart				Red	Blue	Green	Yellow																																	<p>Use the tally chart to create a picture graph.</p> <table border="1" style="width: 100%; text-align: center;"> <tbody> <tr><td>8</td><td> </td><td> </td><td> </td><td> </td></tr> <tr><td>7</td><td> </td><td> </td><td> </td><td> </td></tr> <tr><td>6</td><td> </td><td> </td><td> </td><td> </td></tr> <tr><td>5</td><td> </td><td> </td><td> </td><td> </td></tr> <tr><td>4</td><td> </td><td> </td><td> </td><td> </td></tr> <tr><td>3</td><td> </td><td> </td><td> </td><td> </td></tr> <tr><td>2</td><td> </td><td> </td><td> </td><td> </td></tr> <tr><td>1</td><td> </td><td> </td><td> </td><td> </td></tr> <tr> <td></td> <td>Red</td> <td>Blue</td> <td>Green</td> <td>Yellow</td> </tr> </tbody> </table>	8					7					6					5					4					3					2					1						Red	Blue	Green	Yellow	<p>Which color had the least number of votes?</p> <p>Which color had the most number of votes?</p>	<p>How many more votes did red get than yellow?</p> <p>How many fewer votes did green get than blue?</p>
Tally Chart																																																																																								
Red	Blue	Green	Yellow																																																																																					
8																																																																																								
7																																																																																								
6																																																																																								
5																																																																																								
4																																																																																								
3																																																																																								
2																																																																																								
1																																																																																								
	Red	Blue	Green	Yellow																																																																																				
<p>There are 8 kids in art class. 7 more kids join them. How many kids are there now?</p>	<p>Judith has 10 pieces of candy. She found some more candy. She now has 15 pieces of candy. How many pieces of candy did Judith find?</p>	<p>There are some kids on the playground. 6 more kids join them. There are now 12 kids on the playground. How many kids were on the playground first?</p>	<p>Carlos has 7 pencils. He also has 9 pens. How many pencils and pens does Carlos have?</p>																																																																																					

My Work

Monday	Tuesday
Wednesday	Thursday


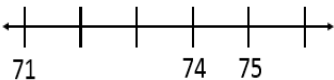

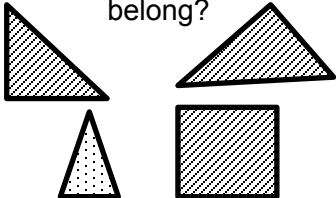

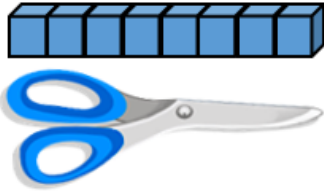

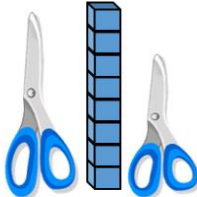





My Progress

MONDAY Out of _____ questions, I got _____ correct.	TUESDAY Out of _____ questions, I got _____ correct.	WEDNESDAY Out of _____ questions, I got _____ correct.	THURSDAY Out of _____ questions, I got _____ correct.
--	---	---	--

Name:

Weekly Math Review - Q3:2

Date:

Monday	Tuesday	Wednesday	Thursday
Put the number cards in order from least to greatest.  _____	Fill in the missing numbers on the number line. 	Put the number cards in order from greatest to least.  _____	Fill in the missing numbers. 55, ____, ____, ____, 59 70, ____, ____, 73, ____
Which shape doesn't belong? 	Draw a shape using a rectangle and circle.	Draw a cube. How many faces? How many vertices? Faces _____ Vertices _____	There are two pieces. What is each piece called? 
How many cubes long are the scissors? 	Circle the shortest pair of scissors. 	Which pair of scissors is 6 blocks long? 	Order the scissors from longest to shortest. 
What time is it?  :	Draw the hands on the clock to show 3:00. 	What time is it?  :	Draw the hands on the clock to show 2:30. 
Andy has 6 toy cars. He gets 8 more for his birthday. How many toy cars does Andy have now? $6 + 8 = \underline{\quad}$	Kenny reads 8 pages of his book. After dinner he reads more. He read a total of 18 pages. How many pages did Kenny read after dinner? $8 + \underline{\quad} = 18$	Azlin has some candy. She gives 5 pieces to her best friend. She has 12 pieces of candy left. How many pieces of candy did Azlin have in the beginning? $\underline{\quad} - 5 = 12$	Hailey drew 9 hearts on a card for her mom. She then drew 6 flowers. How many hearts and flowers did Hailey draw altogether? $9 + 6 = \underline{\quad}$
Jamie has 4 red marbles, 6 green marbles, and 5 blue marbles. How many marbles does Jamie have altogether?	In a box of cookies, there are 3 oatmeal raisin, 7 chocolate chip, and 8 peanut butter. How many cookies are there in all?	Emma has a small garden of flowers. There are 4 pink roses, 6 white roses, and 10 red roses. How many roses does Emma have?	At Joey's birthday party, he has 5 red balloons, 10 blue balloons, and 3 yellow balloons. How many balloons are there altogether?

My Work

Monday	Tuesday
Wednesday	Thursday

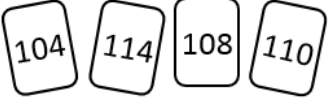
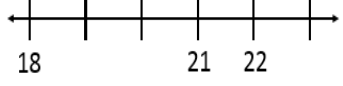
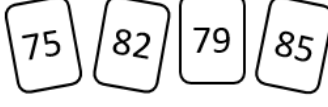






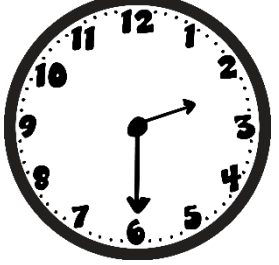



My Progress

MONDAY Out of _____ questions, I got _____ correct.	TUESDAY Out of _____ questions, I got _____ correct.	WEDNESDAY Out of _____ questions, I got _____ correct.	THURSDAY Out of _____ questions, I got _____ correct.
--	---	---	--

Name: _____

Weekly Math Review - Q3:3

Date: _____

Monday	Tuesday	Wednesday	Thursday
Put the number cards in order from least to greatest.  _____	Fill in the missing numbers on the number line. 	Put the number cards in order from greatest to least.  _____	Fill in the missing numbers. 98, 99, ____, ____, 102 54, ____, 56, ____, ____
Which shape doesn't belong? 	Draw a shape using three rectangles.	Draw a hexagon. How many sides? How many points? Sides _____ Points _____	Cut the circle into 2 equal pieces. 
How many cubes long is the ribbon? 	Circle the shortest pencil. 	Which pencil is 9 blocks long? 	Order the pencils from shortest to longest. 
What time is it?  :	Draw the hands on the clock to show 8:00. 	What time is it?  :	Draw the hands on the clock to show 12:30. 
Grace drew 15 hearts on her paper. She erased 6 of them. How many hearts are left? $15 - 6 = \underline{\hspace{2cm}}$	Yvonne's mom made 14 cookies. Yvonne ate some of them. There are now 9 cookies left. How many cookies did Yvonne eat? $14 - \underline{\hspace{2cm}} = 9$	Evelyn has some marbles. She gave 8 of them to her sister. She has 12 marbles left. How many marbles did Evelyn have in the beginning? $\underline{\hspace{2cm}} - 8 = 12$	Kailey is getting ready for school. She spent 8 minutes eating breakfast, and 5 minutes brushing her teeth. How minutes did Kailey spend getting ready for school? $8 + 5 = \underline{\hspace{2cm}}$
In the pet store, there are 4 brown dogs, 5 white dogs, and 6 black dogs. How many dogs are there altogether?	Jessica has 8 dollars. Her sister has 5 dollars. Her brother has 6 dollars. How many dollars do they have in all?	At the zoo, there are 4 lions, 5 zebras, and 5 giraffes. How many animals are there in all?	Joey has lots of blocks. He has 7 red blocks, 3 blue blocks, and 8 green blocks. How many blocks does Joey have?

My Work

Monday	Tuesday
Wednesday	Thursday

My Progress

MONDAY Out of _____ questions, I got _____ correct.	TUESDAY Out of _____ questions, I got _____ correct.	WEDNESDAY Out of _____ questions, I got _____ correct.	THURSDAY Out of _____ questions, I got _____ correct.
--	---	---	--

Name: _____

Weekly Math Review - Q3:4

Date: _____

Monday	Tuesday	Wednesday	Thursday
<p>Put the number cards in order from least to greatest.</p> <div> <div>35</div> <div>38</div> <div>30</div> <div>32</div> </div> <p>_____</p>	<p>Fill in the missing numbers on the number line.</p>	<p>Put the number cards in order from greatest to least.</p> <div> <div>111</div> <div>101</div> <div>110</div> <div>100</div> </div> <p>_____</p>	<p>Fill in the missing numbers.</p> <p>____, ____, 11, 12, 13</p> <p>71, 72, ____, ____, ____</p>
<p>Which shape doesn't belong?</p> <div> </div>	<p>Draw a shape using two triangles.</p>	<p>Draw a triangle. How many sides? How many points?</p> <p>Sides _____ Points _____</p>	<p>You and your best friend are going to share a cookie. Cut the cookie so you and your friend get equal shares.</p>
<p>How many paper clips long is the spoon?</p>	<p>Circle the longest spoon.</p>	<p>Which spoon is 11 blocks long?</p>	<p>Order the spoons from longest to shortest.</p>
<p>What time is it?</p> <p>_____</p>	<p>Draw the hands on the clock to show 5:00.</p>	<p>What time is it?</p> <p>_____</p>	<p>Draw the hands on the clock to show 7:30.</p>
<p>Luis has 18 cookies. He gives 5 cookies to his friend. How many cookies does he have left?</p> <p>18 - 5 = _____</p>	<p>In Jamie's pencil box she has 6 pencils, 4 erasers, and 3 pens. How many things are in her pencil box?</p>	<p>There are 8 green gumballs, and some blue gumballs in a jar. There are 14 gumballs altogether. How many are blue?</p> <p>8 + _____ = 14</p>	<p>There are 5 chocolate chip cookies, 8 oatmeal cookies, and 7 sugar cookies. How many cookies are there altogether?</p>
<p>Find the missing number.</p> <p>8 - 3 = _____</p> <p>3 + _____ = 8</p>	<p>Find the missing number.</p> <p>13 - 7 = _____</p> <p>7 + _____ = 13</p>	<p>Find the missing number.</p> <p>12 - 5 = _____</p> <p>5 + _____ = 12</p>	<p>Find the missing number.</p> <p>10 - 6 = _____</p> <p>6 + _____ = 10</p>

My Work

Monday	Tuesday
Wednesday	Thursday


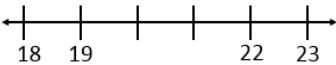



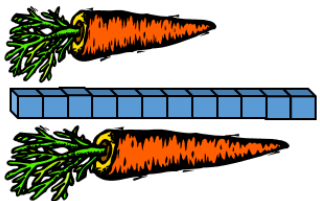





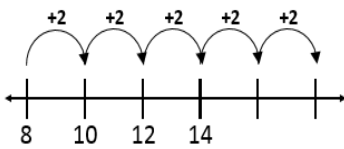
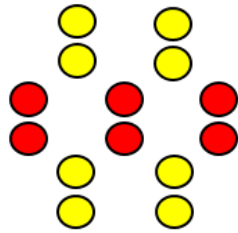
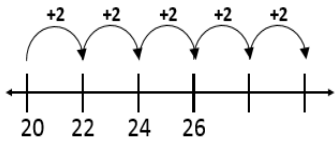
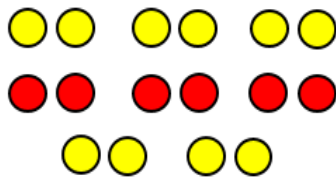
My Progress

MONDAY Out of _____ questions, I got _____ correct.	TUESDAY Out of _____ questions, I got _____ correct.	WEDNESDAY Out of _____ questions, I got _____ correct.	THURSDAY Out of _____ questions, I got _____ correct.
--	---	---	--

Name:

Weekly Math Review - Q3:5

Date:

Monday	Tuesday	Wednesday	Thursday
<p>Put the number cards in order from least to greatest.</p> <div style="display: flex; justify-content: space-around; align-items: center;"> <div style="border: 1px solid black; border-radius: 10px; padding: 5px; margin: 5px;">73</div> <div style="border: 1px solid black; border-radius: 10px; padding: 5px; margin: 5px;">78</div> <div style="border: 1px solid black; border-radius: 10px; padding: 5px; margin: 5px;">72</div> <div style="border: 1px solid black; border-radius: 10px; padding: 5px; margin: 5px;">70</div> </div> <p>_____</p>	<p>Name the shape</p> <div style="text-align: center;">  </div> <p>How many?</p> <p>Sides _____ Points _____</p>	<p>Fill in the missing numbers on the number line.</p> <div style="text-align: center;">  </div>	<p>Cut the icecream bar into fourths to share with your friends.</p> <div style="text-align: center;">  </div>
<p>How many paper clips long is the carrot?</p> <div style="text-align: center;">  </div>	<p>Circle the shortest carrot.</p> <div style="text-align: center;">  </div>	<p>Which carrot is 8 blocks long?</p> <div style="text-align: center;">  </div>	<p>Order the carrots from shortest to longest.</p> <div style="text-align: center;">  </div>
<p>What time is it?</p> <div style="text-align: center;">  </div>	<p>Draw the hands on the clock to show 1:00.</p> <div style="text-align: center;">  </div>	<p>What time is it?</p> <div style="text-align: center;">  </div>	<p>Draw the hands on the clock to show 10:30.</p> <div style="text-align: center;">  </div>
<p>Katie bought 12 roses. She gave some away, and now has 4 roses left. How many roses did Katie give away?</p>	<p>In Maggie's garden there are 5 pink flowers, 3 white flowers, and 8 red flowers. How many flowers are there altogether?</p>	<p>Joe baked 12 cookies and 6 cupcakes for the bake sale. How many things did Joe bake?</p>	<p>In a bag of marbles, there are 10 yellow marbles, 4 blue marbles, and 5 green marbles. How many marbles are there altogether?</p>
<p>Find the missing number.</p> <p>$16 - 8 = \underline{\quad}$</p> <p>$8 + \underline{\quad} = 16$</p>	<p>Find the missing number.</p> <p>$19 - 6 = \underline{\quad}$</p> <p>$6 + \underline{\quad} = 19$</p>	<p>Find the missing number.</p> <p>$13 - 7 = \underline{\quad}$</p> <p>$7 + \underline{\quad} = 13$</p>	<p>Find the missing number.</p> <p>$14 - 9 = \underline{\quad}$</p> <p>$9 + \underline{\quad} = 14$</p>
<p>Fill in the missing numbers.</p> <div style="text-align: center;">  </div>	<p>How many?</p> <div style="text-align: center;">  </div>	<p>Fill in the missing numbers.</p> <div style="text-align: center;">  </div>	<p>How many?</p> <div style="text-align: center;">  </div>

My Work

Monday	Tuesday
Wednesday	Thursday

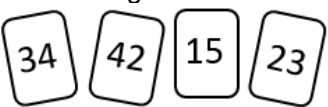

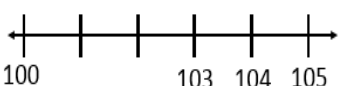
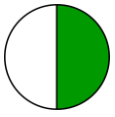
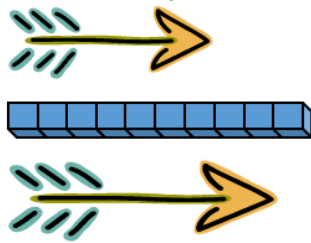
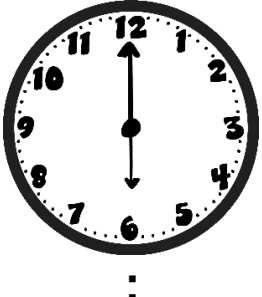


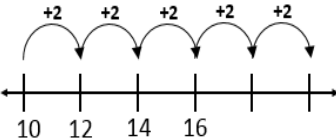
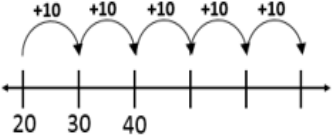
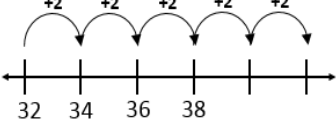
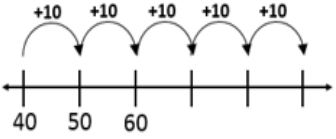
My Progress

MONDAY Out of _____ questions, I got _____ correct.	TUESDAY Out of _____ questions, I got _____ correct.	WEDNESDAY Out of _____ questions, I got _____ correct.	THURSDAY Out of _____ questions, I got _____ correct.
--	---	---	--

Name:

Weekly Math Review - Q3:6

Date:

Monday	Tuesday	Wednesday	Thursday
Put the number cards in order from greatest to least.  _____	Name the shape  _____ How many? Sides _____ Points _____	Fill in the missing numbers on the number line. 	What is the shaded piece called? 
Which arrow is 7 blocks long? 	What time is it? 	Order the arrows from longest to shortest. 	Draw the hands on the clock to show 4:30. 
There is a jar of gumballs. Susie takes 5 gumballs out of the jar. There are 8 gumballs left. How many gumballs were in the jar before Susie took some?	Jessica went to the store and bought an apple for 2 dollars, a watermelon for 6 dollars, and a bag of potatoes for 8 dollars. How many dollars did Jessica spend?	Brandon plays soccer. During his first game he kicked the ball 8 times. During his second game he kicked the ball 10 times. How many times did Brandon kick the ball in both games?	Gavin reached his hand in a bag and pulled out 7 pennies, 3 dimes, and 4 quarters. How many coins does Gavin have?
Find the missing number. $14 - 3 = \underline{\quad}$ $3 + \underline{\quad} = 14$	Find the missing number. $12 - 9 = \underline{\quad}$ $9 + \underline{\quad} = 12$	Find the missing number. $15 - 8 = \underline{\quad}$ $8 + \underline{\quad} = 15$	Find the missing number. $11 - 5 = \underline{\quad}$ $5 + \underline{\quad} = 11$
Fill in the missing numbers. 	Fill in the missing numbers. 	Fill in the missing numbers. 	Fill in the missing numbers. 
Solve. $\begin{array}{r} 14 \\ + 3 \\ \hline \end{array}$ $\begin{array}{r} 17 \\ - 5 \\ \hline \end{array}$ $\begin{array}{r} 9 \\ + 7 \\ \hline \end{array}$ $8 + 6 = \underline{\quad}$ $14 - 8 = \underline{\quad}$	Solve. $\begin{array}{r} 10 \\ + 7 \\ \hline \end{array}$ $\begin{array}{r} 15 \\ - 6 \\ \hline \end{array}$ $\begin{array}{r} 6 \\ + 9 \\ \hline \end{array}$ $11 + 7 = \underline{\quad}$ $16 - 4 = \underline{\quad}$	Solve. $\begin{array}{r} 7 \\ + 2 \\ \hline \end{array}$ $\begin{array}{r} 13 \\ - 6 \\ \hline \end{array}$ $\begin{array}{r} 7 \\ + 5 \\ \hline \end{array}$ $6 + 8 = \underline{\quad}$ $9 - 7 = \underline{\quad}$	Solve. $\begin{array}{r} 12 \\ + 6 \\ \hline \end{array}$ $\begin{array}{r} 19 \\ - 7 \\ \hline \end{array}$ $\begin{array}{r} 10 \\ + 4 \\ \hline \end{array}$ $12 + 7 = \underline{\quad}$ $18 - 9 = \underline{\quad}$

My Work

Monday	Tuesday
Wednesday	Thursday


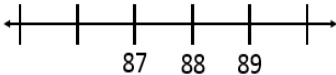
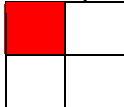
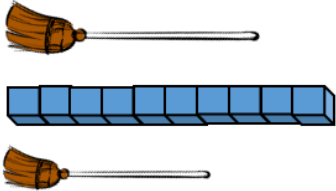
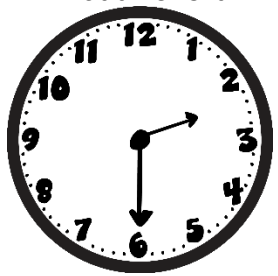
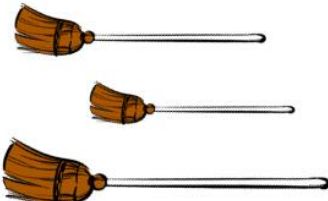

My Progress

MONDAY Out of _____ questions, I got _____ correct.	TUESDAY Out of _____ questions, I got _____ correct.	WEDNESDAY Out of _____ questions, I got _____ correct.	THURSDAY Out of _____ questions, I got _____ correct.
--	---	---	--

Name:

Weekly Math Review - Q3:7

Date:

Monday	Tuesday	Wednesday	Thursday
Put the number cards in order from greatest to least. <div style="display: flex; justify-content: space-around; align-items: center;"> <div style="border: 1px solid black; border-radius: 10px; padding: 5px; margin: 2px;">47</div> <div style="border: 1px solid black; border-radius: 10px; padding: 5px; margin: 2px;">45</div> <div style="border: 1px solid black; border-radius: 10px; padding: 5px; margin: 2px;">49</div> <div style="border: 1px solid black; border-radius: 10px; padding: 5px; margin: 2px;">40</div> </div> _____	Name the shape <div style="text-align: center; margin: 10px 0;">  </div> _____ How many? Sides _____ Points _____	Fill in the missing numbers on the number line. <div style="text-align: center; margin: 10px 0;">  </div>	What is the shaded piece called? <div style="text-align: center; margin: 10px 0;">  </div>
Which broom is 6 blocks long? <div style="text-align: center; margin: 10px 0;">  </div>	What time is it? <div style="text-align: center; margin: 10px 0;">  </div>	Order the brooms from longest to shortest. <div style="text-align: center; margin: 10px 0;">  </div>	Draw the hands on the clock to show 9:00. <div style="text-align: center; margin: 10px 0;">  </div>
You have 12 balloons, and your friend has 6 balloons. How many more balloons do you have than your friend?	Amy has 4 cookies, 3 cheese sticks, and 8 crackers. How many pieces of food does Amy have?	There are some birds sitting in a tree. 5 of them fly away. Now there are 10 birds left. How many birds were there altogether?	A bug has 6 legs. If there are 3 bugs, how many legs do they have altogether?
Find the missing number. $12 - 7 = \underline{\quad}$ $7 + \underline{\quad} = 12$	Find the missing number. $18 - 12 = \underline{\quad}$ $12 + \underline{\quad} = 18$	Find the missing number. $9 - 5 = \underline{\quad}$ $5 + \underline{\quad} = 9$	Find the missing number. $10 - 6 = \underline{\quad}$ $6 + \underline{\quad} = 10$
Count by 2's. 14, 16, 18, <u> </u> , <u> </u>	Count by 10's 30, 40, 50, <u> </u> , <u> </u>	Count by 2's. 52, 54, 56, <u> </u> , <u> </u>	Count by 10's 20, 30, 40, <u> </u> , <u> </u>
Solve. <div style="display: flex; justify-content: space-around; align-items: center;"> <div style="text-align: center;"> $\begin{array}{r} 7 \\ + 5 \\ \hline \end{array}$ </div> <div style="text-align: center;"> $\begin{array}{r} 11 \\ - 8 \\ \hline \end{array}$ </div> <div style="text-align: center;"> $\begin{array}{r} 6 \\ + 8 \\ \hline \end{array}$ </div> </div>	Solve. <div style="display: flex; justify-content: space-around; align-items: center;"> <div style="text-align: center;"> $\begin{array}{r} 16 \\ + 4 \\ \hline \end{array}$ </div> <div style="text-align: center;"> $\begin{array}{r} 12 \\ - 7 \\ \hline \end{array}$ </div> <div style="text-align: center;"> $\begin{array}{r} 9 \\ + 9 \\ \hline \end{array}$ </div> </div>	Solve. <div style="display: flex; justify-content: space-around; align-items: center;"> <div style="text-align: center;"> $\begin{array}{r} 13 \\ + 4 \\ \hline \end{array}$ </div> <div style="text-align: center;"> $\begin{array}{r} 18 \\ - 7 \\ \hline \end{array}$ </div> <div style="text-align: center;"> $\begin{array}{r} 9 \\ + 7 \\ \hline \end{array}$ </div> </div>	Solve. <div style="display: flex; justify-content: space-around; align-items: center;"> <div style="text-align: center;"> $\begin{array}{r} 7 \\ + 11 \\ \hline \end{array}$ </div> <div style="text-align: center;"> $\begin{array}{r} 12 \\ - 8 \\ \hline \end{array}$ </div> <div style="text-align: center;"> $\begin{array}{r} 8 \\ + 6 \\ \hline \end{array}$ </div> </div>
True or False? $8 = 8$ _____ $7 + 2 = 8$ _____	True or False? $5 = 4$ _____ $9 = 10 - 1$ _____	True or False? $3 + 3 = 5$ _____ $1 + 1 = 2 + 0$ _____	True or False? $7 = 4 + 3$ _____ $3 + 2 = 4 + 3$ _____

My Work

Monday	Tuesday
Wednesday	Thursday

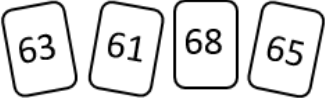

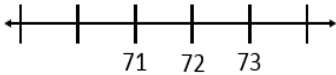





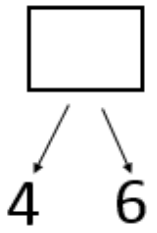
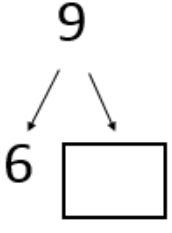
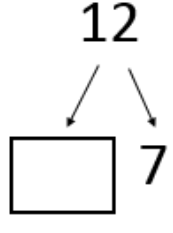
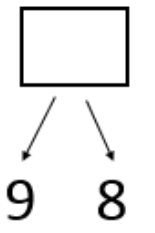
My Progress

MONDAY Out of _____ questions, I got _____ correct.	TUESDAY Out of _____ questions, I got _____ correct.	WEDNESDAY Out of _____ questions, I got _____ correct.	THURSDAY Out of _____ questions, I got _____ correct.
--	---	---	--

Name:

Weekly Math Review - Q3:8

Date:

Monday	Tuesday	Wednesday	Thursday
Put the number cards in order from greatest to least.  _____	Name the shape  _____ How many? Sides _____ Points _____	Fill in the missing numbers on the number line. 	Cut the rectangle into quarters. 
Which hammer is 7 blocks long? 	What time is it? 	Order the hammers from shortest to longest. 	Draw the hands on the clock to show 6:30. 
Kenny bought a toy car for 3 dollars and a book for 5 dollars. How much money did Kenny spend?	Luis has 3 dogs, 8 fish, and 6 snakes. How many pets does Luis have?	Walter had 7 pieces of yellow paper and 12 pieces of green paper. How many pieces of paper does Walter have?	Notebooks cost 2 dollars. If Katie buys 3 notebooks, how many dollars will she spend?
Count by 2's. 24, 26, 28, _____, _____	Count by 10's 10, 20, 30, _____, _____	Count by 2's. 70, 72, 74, _____, _____	Count by 10's 60, 70, 80, _____, _____
Solve. $\begin{array}{r} 3 \\ + 2 \\ \hline \end{array}$ $\begin{array}{r} 8 \\ - 5 \\ \hline \end{array}$ $\begin{array}{r} 7 \\ + 8 \\ \hline \end{array}$	Solve. $\begin{array}{r} 10 \\ + 5 \\ \hline \end{array}$ $\begin{array}{r} 13 \\ - 9 \\ \hline \end{array}$ $\begin{array}{r} 6 \\ + 2 \\ \hline \end{array}$	Solve. $\begin{array}{r} 10 \\ + 6 \\ \hline \end{array}$ $\begin{array}{r} 15 \\ - 9 \\ \hline \end{array}$ $\begin{array}{r} 3 \\ + 6 \\ \hline \end{array}$	Solve. $\begin{array}{r} 7 \\ + 6 \\ \hline \end{array}$ $\begin{array}{r} 7 \\ - 3 \\ \hline \end{array}$ $\begin{array}{r} 13 \\ + 5 \\ \hline \end{array}$
True or False? $4 + 3 = 7$ _____ $8 = 4 - 4$ _____	True or False? $7 = 6 + 1$ _____ $3 + 5 = 4 + 4$ _____	True or False? $7 = 3 + 5$ _____ $0 + 9 = 5 + 5$ _____	True or False? $1 = 5 - 4$ _____ $6 - 5 = 1$ _____
Find the missing number. 	Find the missing number. 	Find the missing number. 	Find the missing number. 

My Work

Monday	Tuesday
Wednesday	Thursday


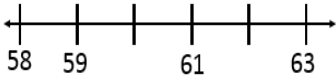


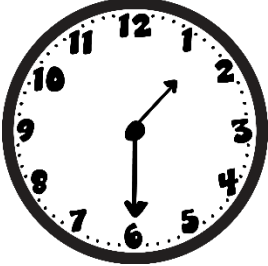


My Progress

MONDAY Out of _____ questions, I got _____ correct.	TUESDAY Out of _____ questions, I got _____ correct.	WEDNESDAY Out of _____ questions, I got _____ correct.	THURSDAY Out of _____ questions, I got _____ correct.
--	---	---	--

Name:

Weekly Math Review - Q3:9

Date:

Monday	Tuesday	Wednesday	Thursday
Put the number cards in order from least to greatest. <div style="display: flex; justify-content: space-around; align-items: center;"> <div style="border: 1px solid black; padding: 5px; margin: 2px;">83</div> <div style="border: 1px solid black; padding: 5px; margin: 2px;">73</div> <div style="border: 1px solid black; padding: 5px; margin: 2px;">93</div> <div style="border: 1px solid black; padding: 5px; margin: 2px;">63</div> </div> _____	Name the shape <div style="text-align: center; margin: 10px 0;">  </div> _____ How many? Sides _____ Points _____	Fill in the missing numbers on the number line. <div style="text-align: center; margin: 10px 0;">  </div>	Cut the circle into quarters. <div style="text-align: center; margin: 10px 0;">  </div>
How many paper clips long is the rose? <div style="text-align: center; margin: 10px 0;">  </div>	What time is it? <div style="text-align: center; margin: 10px 0;">  </div>	Order the roses from shortest to longest. <div style="text-align: center; margin: 10px 0;">  </div>	Draw the hands on the clock to show 11:00. <div style="text-align: center; margin: 10px 0;">  </div>
Jamie has 5 stickers, and Andy has 8 stickers. How many more stickers does Andy have than Jamie?	Jasmine has 8 red balloons, 5 green balloons, and 3 yellow balloons. How many balloons does Jasmine have?	Jose has some candy. He eats 3 pieces. He now has 7 pieces left. How many pieces of candy did he start with?	Andy took 5 pictures of his mom, 3 pictures of his sister, and 6 pictures of his dog. How many pictures did he take altogether?
Count by 2's. 36, 38, 40, _____, _____	Count by 10's 80, 90, 100, _____, _____	Count by 2's. 62, 64, 66, _____, _____	Count by 10's 30, 40, 50, _____, _____
Solve. <div style="display: flex; justify-content: space-around;"> <div style="text-align: center;"> $\begin{array}{r} 9 \\ + 7 \\ \hline \end{array}$ </div> <div style="text-align: center;"> $\begin{array}{r} 15 \\ - 8 \\ \hline \end{array}$ </div> <div style="text-align: center;"> $\begin{array}{r} 6 \\ + 3 \\ \hline \end{array}$ </div> </div>	Solve. <div style="display: flex; justify-content: space-around;"> <div style="text-align: center;"> $\begin{array}{r} 12 \\ + 2 \\ \hline \end{array}$ </div> <div style="text-align: center;"> $\begin{array}{r} 17 \\ - 6 \\ \hline \end{array}$ </div> <div style="text-align: center;"> $\begin{array}{r} 8 \\ + 5 \\ \hline \end{array}$ </div> </div>	Solve. <div style="display: flex; justify-content: space-around;"> <div style="text-align: center;"> $\begin{array}{r} 7 \\ + 6 \\ \hline \end{array}$ </div> <div style="text-align: center;"> $\begin{array}{r} 14 \\ - 6 \\ \hline \end{array}$ </div> <div style="text-align: center;"> $\begin{array}{r} 8 \\ + 4 \\ \hline \end{array}$ </div> </div>	Solve. <div style="display: flex; justify-content: space-around;"> <div style="text-align: center;"> $\begin{array}{r} 13 \\ + 6 \\ \hline \end{array}$ </div> <div style="text-align: center;"> $\begin{array}{r} 12 \\ - 7 \\ \hline \end{array}$ </div> <div style="text-align: center;"> $\begin{array}{r} 10 \\ + 7 \\ \hline \end{array}$ </div> </div>
True or False? $2 = 3$ _____ $8 - 2 = 6$ _____	True or False? $3 + 3 = 6 + 0$ _____ $5 - 2 = 8 - 5$ _____	True or False? $5 + 5 = 11$ _____ $6 - 4 = 2$ _____	True or False? $7 = 3 + 4$ _____ $2 - 1 = 1 + 0$ _____
Find the missing number. $7 + \square = 10$ $\square - 4 = 9$	Find the missing number. $5 + 8 = \square$ $10 - \square = 7$	Find the missing number. $10 + \square = 14$ $\square - 5 = 7$	Find the missing number. $\square + 6 = 12$ $14 - 5 = \square$

My Work

Monday	Tuesday
Wednesday	Thursday


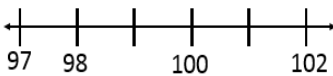





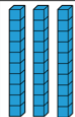





My Progress

MONDAY Out of _____ questions, I got _____ correct.	TUESDAY Out of _____ questions, I got _____ correct.	WEDNESDAY Out of _____ questions, I got _____ correct.	THURSDAY Out of _____ questions, I got _____ correct.
--	---	---	--

Name:

Weekly Math Review - Q4:1

Date:

Monday	Tuesday	Wednesday	Thursday								
Put the number cards in order from least to greatest. <div style="display: flex; justify-content: space-around; align-items: center;"> <div style="border: 1px solid black; padding: 5px; margin: 2px;">38</div> <div style="border: 1px solid black; padding: 5px; margin: 2px;">30</div> <div style="border: 1px solid black; padding: 5px; margin: 2px;">33</div> <div style="border: 1px solid black; padding: 5px; margin: 2px;">37</div> </div> _____	Name the shape  _____ How many? faces _____ Vertices _____	Fill in the missing numbers on the number line. 	Cut the circle into halves. 								
Circle the nail that is 3 paperclips long. 	What time is it?  :	Order the nails from longest to shortest. 	Draw the hands on the clock to show 3:30. 								
Amy cooked 12 brownies. She ate some, and now has 8 brownies left. How many brownies did Amy eat?	In Emma's vegetable garden there are 8 carrots, 3 tomatoes, and 5 heads of lettuce. How many vegetables does Emma have in all?	Owen has 15 crayons. 8 of them are broken. How many of Owen's crayons are not broken?	Each board game costs 5 dollars. How much money do 3 board games cost?								
Count by 2's. 14, 16, 18, _____, _____	Count by 10's 80, 90, 100, _____, _____	Count by 2's. 54, 56, 58, _____, _____	Count by 10's 0, 10, 20, _____, _____								
Solve. <div style="display: flex; justify-content: space-around;"> <div style="text-align: center;"> $\begin{array}{r} 4 \\ + 6 \\ \hline \end{array}$ </div> <div style="text-align: center;"> $\begin{array}{r} 9 \\ - 7 \\ \hline \end{array}$ </div> <div style="text-align: center;"> $\begin{array}{r} 12 \\ + 5 \\ \hline \end{array}$ </div> </div>	Solve. <div style="display: flex; justify-content: space-around;"> <div style="text-align: center;"> $\begin{array}{r} 11 \\ + 7 \\ \hline \end{array}$ </div> <div style="text-align: center;"> $\begin{array}{r} 16 \\ - 8 \\ \hline \end{array}$ </div> <div style="text-align: center;"> $\begin{array}{r} 7 \\ + 2 \\ \hline \end{array}$ </div> </div>	Solve. <div style="display: flex; justify-content: space-around;"> <div style="text-align: center;"> $\begin{array}{r} 5 \\ + 3 \\ \hline \end{array}$ </div> <div style="text-align: center;"> $\begin{array}{r} 18 \\ - 12 \\ \hline \end{array}$ </div> <div style="text-align: center;"> $\begin{array}{r} 8 \\ + 7 \\ \hline \end{array}$ </div> </div>	Solve. <div style="display: flex; justify-content: space-around;"> <div style="text-align: center;"> $\begin{array}{r} 11 \\ + 9 \\ \hline \end{array}$ </div> <div style="text-align: center;"> $\begin{array}{r} 15 \\ - 10 \\ \hline \end{array}$ </div> <div style="text-align: center;"> $\begin{array}{r} 12 \\ + 4 \\ \hline \end{array}$ </div> </div>								
True or False? $7 + 7 = 10 + 4$ _____	True or False? $1 + 8 = 8 - 1$ _____	True or False? $12 - 5 = 8$ _____	True or False? $14 = 8 + 6$ _____								
Find the missing number. $12 + \boxed{} = 18$	Find the missing number. $9 + 6 = \boxed{}$	Find the missing number. $7 + \boxed{} = 11$	Find the missing number. $\boxed{} + 9 = 15$								
Write the number. <table border="1" style="margin: 0 auto;"> <thead> <tr> <th>Tens</th> <th>Ones</th> </tr> </thead> <tbody> <tr> <td style="text-align: center;">  </td> <td style="text-align: center;">  </td> </tr> </tbody> </table> _____	Tens	Ones			Draw the number 42. <table border="1" style="margin: 0 auto;"> <thead> <tr> <th>Tens</th> <th>Ones</th> </tr> </thead> <tbody> <tr> <td style="height: 60px;"></td> <td style="height: 60px;"></td> </tr> </tbody> </table>	Tens	Ones			How many tens are there in the number 75?	How many ones are there in the number 58?
Tens	Ones										
											
Tens	Ones										

My Work

Monday	Tuesday
Wednesday	Thursday


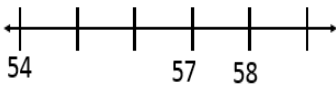

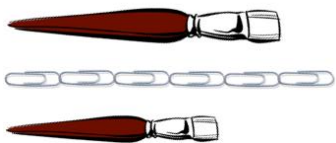

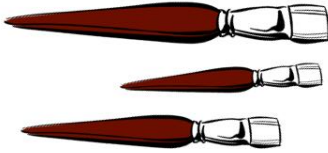

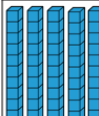







My Progress

MONDAY Out of _____ questions, I got _____ correct.	TUESDAY Out of _____ questions, I got _____ correct.	WEDNESDAY Out of _____ questions, I got _____ correct.	THURSDAY Out of _____ questions, I got _____ correct.
--	---	---	--

Name:

Weekly Math Review - Q4:2

Date:

Monday	Tuesday	Wednesday	Thursday								
Put the number cards in order from least to greatest. <div style="display: flex; justify-content: space-around; align-items: center;"> <div style="border: 1px solid black; padding: 5px; margin: 2px;">101</div> <div style="border: 1px solid black; padding: 5px; margin: 2px;">108</div> <div style="border: 1px solid black; padding: 5px; margin: 2px;">100</div> <div style="border: 1px solid black; padding: 5px; margin: 2px;">105</div> </div> _____	Name the shape  _____ How many? sides _____ points _____	Fill in the missing numbers on the number line. 	You and your three friends are going to share a cake. Cut the cake into equal shares. 								
Circle the paint brush that is 4 paperclips long. 	What time is it? 	Order the paint brushes from shortest to longest 	Draw the hands on the clock to show 9:00. 								
Tatiana is having a birthday party. There were 8 boys and 11 girls. How many people were at Tatiana's party?	At the pet store there are 7 dogs, 9 cats, and 3 birds. How many pets are there altogether?	There are some blocks in a box. 8 blocks are taken out. Now there are 7 blocks left. How many blocks were in the box at the beginning?	For breakfast, Katie ate 5 strawberries, 6 grapes, and 3 banana slices. How many pieces of fruit did Katie eat?								
Count by 2's. 90, 92, 94, _____, _____	True or False? $12 = 15 - 4$ _____	Count by 10's. 50, 60, 70, _____, _____	True or False? $6 + 2 = 7 + 1$ _____								
Solve. $\begin{array}{r} 8 \\ + 1 \\ \hline \end{array}$ $\begin{array}{r} 12 \\ - 8 \\ \hline \end{array}$ $\begin{array}{r} 14 \\ + 4 \\ \hline \end{array}$	Solve. $\begin{array}{r} 13 \\ + 6 \\ \hline \end{array}$ $\begin{array}{r} 15 \\ - 9 \\ \hline \end{array}$ $\begin{array}{r} 8 \\ + 6 \\ \hline \end{array}$	Solve. $\begin{array}{r} 3 \\ + 7 \\ \hline \end{array}$ $\begin{array}{r} 16 \\ - 13 \\ \hline \end{array}$ $\begin{array}{r} 8 \\ + 8 \\ \hline \end{array}$	Solve. $\begin{array}{r} 11 \\ + 6 \\ \hline \end{array}$ $\begin{array}{r} 17 \\ - 11 \\ \hline \end{array}$ $\begin{array}{r} 5 \\ + 4 \\ \hline \end{array}$								
Find the missing number. $14 + \boxed{} = 15$	Find the missing number. $12 + 5 = \boxed{}$	Find the missing number. $9 + \boxed{} = 16$	Find the missing number. $\boxed{} + 4 = 11$								
58 How many tens? _____ How many ones? _____	Write the number. <table border="1" style="margin: auto;"> <thead> <tr> <th>Tens</th> <th>Ones</th> </tr> </thead> <tbody> <tr> <td style="text-align: center;">  </td> <td style="text-align: center;">  </td> </tr> </tbody> </table> _____	Tens	Ones			Draw the number 13. <table border="1" style="margin: auto;"> <thead> <tr> <th>Tens</th> <th>Ones</th> </tr> </thead> <tbody> <tr> <td style="height: 80px;"></td> <td style="height: 80px;"></td> </tr> </tbody> </table>	Tens	Ones			60 How many tens? _____ How many ones? _____
Tens	Ones										
											
Tens	Ones										
Feed the alligator the bigger number. 32 54  _____	Feed the alligator the bigger number. 71 49  _____	Use $>$, $<$, or $=$ to compare the numbers. $26 \bigcirc 34$	Use $>$, $<$, or $=$ to compare the numbers. $49 \bigcirc 80$								

My Work

Monday	Tuesday
Wednesday	Thursday

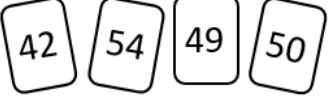

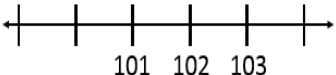

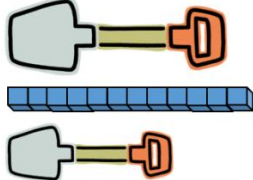



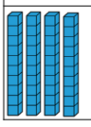
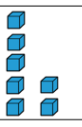




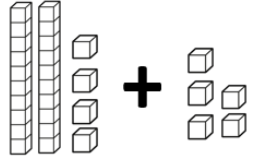
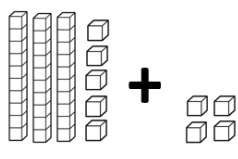
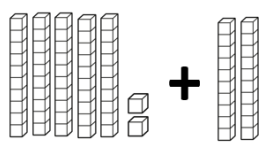
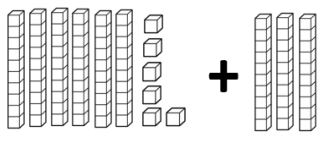
My Progress

MONDAY Out of _____ questions, I got _____ correct.	TUESDAY Out of _____ questions, I got _____ correct.	WEDNESDAY Out of _____ questions, I got _____ correct.	THURSDAY Out of _____ questions, I got _____ correct.
--	---	---	--

Name: _____

Weekly Math Review - Q4:3

Date: _____

Monday	Tuesday	Wednesday	Thursday								
Put the number cards in order from greatest to least.  _____	Name the shape  _____ How many? sides _____ points _____	Fill in the missing numbers on the number line. 	Your teacher wants you to cut the paper into fourths. 								
Circle the shovel that is 11 cubes long. 	What time is it?  :	Order the shovels from longest to shortest. 	Draw the hands on the clock to show 1:30. 								
Adrian has 7 sugar cookies, 3 oatmeal cookies, and 5 chocolate chip cookies. How many cookies are there altogether?	Asia has 9 pencils. Joshua has 14 pencils. How many more pencils does Joshua have than Asia?	Books cost 4 dollars. Andy bought 3 books. How many dollars did he spend on books?	There are some marbles in a bag. 8 of them are blue, and the rest are green. If there are 11 marbles total, how many marbles are green?								
Count by 2's. 76, 78, 80, _____, _____	True or False? $8 - 5 = 3$ _____	Count by 10's. 10, 20, 30, _____, _____	True or False? $8 + 7 = 14 - 1$ _____								
Solve. $\begin{array}{r} 4 \\ + 7 \\ \hline \end{array}$ $\begin{array}{r} 16 \\ - 5 \\ \hline \end{array}$ $\begin{array}{r} 11 \\ + 7 \\ \hline \end{array}$	Find the missing number. $10 + \square = 18$	Solve. $\begin{array}{r} 7 \\ + 7 \\ \hline \end{array}$ $\begin{array}{r} 20 \\ - 8 \\ \hline \end{array}$ $\begin{array}{r} 5 \\ + 6 \\ \hline \end{array}$	Find the missing number. $\square + 7 = 12$								
43 How many tens? _____ How many ones? _____	Write the number. <table border="1" data-bbox="535 1354 722 1522"> <thead> <tr> <th>Tens</th> <th>Ones</th> </tr> </thead> <tbody> <tr> <td></td> <td></td> </tr> </tbody> </table>	Tens	Ones			Draw the number 54. <table border="1" data-bbox="868 1354 1136 1543"> <thead> <tr> <th>Tens</th> <th>Ones</th> </tr> </thead> <tbody> <tr> <td> </td> <td> </td> </tr> </tbody> </table>	Tens	Ones			8 How many tens? _____ How many ones? _____
Tens	Ones										
											
Tens	Ones										
Use $>$, $<$, or $=$ to compare the numbers. $40 \bigcirc 80$	Use $>$, $<$, or $=$ to compare the numbers. $38 \bigcirc 34$	Use $>$, $<$, or $=$ to compare the numbers. $19 \bigcirc 71$	Use $>$, $<$, or $=$ to compare the numbers. $85 \bigcirc 62$								
Add $24 + 5 =$ 	Add $35 + 4 =$ 	Add $52 + 20 =$ 	Add $66 + 30 =$ 								

My Work

Monday	Tuesday
Wednesday	Thursday


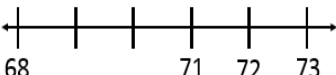

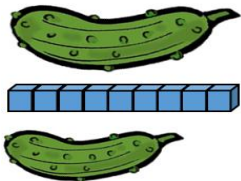
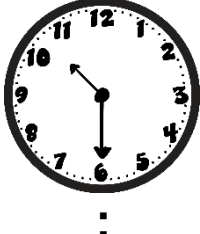



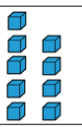




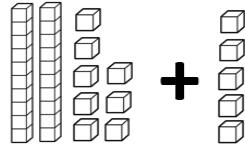
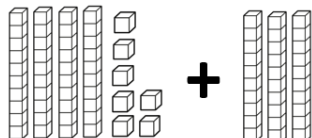
My Progress

MONDAY Out of _____ questions, I got _____ correct.	TUESDAY Out of _____ questions, I got _____ correct.	WEDNESDAY Out of _____ questions, I got _____ correct.	THURSDAY Out of _____ questions, I got _____ correct.
--	---	---	--

Name: _____

Weekly Math Review - Q4:4

Date: _____

Monday	Tuesday	Wednesday	Thursday																																																												
Put the number cards in order from greatest to least. <div style="display: flex; justify-content: space-around; align-items: center;"> <div style="border: 1px solid black; padding: 5px; margin: 2px;">13</div> <div style="border: 1px solid black; padding: 5px; margin: 2px;">18</div> <div style="border: 1px solid black; padding: 5px; margin: 2px;">21</div> <div style="border: 1px solid black; padding: 5px; margin: 2px;">15</div> </div> _____	Name the shape <div style="text-align: center; margin: 10px 0;">  </div> _____ How many? straight sides _____ points _____	Fill in the missing numbers on the number line. <div style="text-align: center; margin: 10px 0;">  </div>	Your teacher wants you to cut the paper into halves. <div style="text-align: center; margin: 10px 0;">  </div>																																																												
Circle the pickle that is 7 cubes long. <div style="text-align: center; margin: 10px 0;">  </div>	What time is it? <div style="text-align: center; margin: 10px 0;">  </div>	Order the pickles from shortest to longest. <div style="text-align: center; margin: 10px 0;">  </div>	Draw the hands on the clock to show 5.00 <div style="text-align: center; margin: 10px 0;">  </div>																																																												
Fiona drinks 5 cups of water every day. How many cups of water will she drink in 3 days?	Jason has 12 strawberries in his garden. He eats some. Now he has 7 strawberries. How many strawberries did Jason eat?	A bookshelf has 5 fiction books, 3 mystery books, and 6 non-fiction books. How many books are on the shelf?	Bailey has a bowl of 12 grapes, and Jonathan has a bowl of 8 grapes. How many more grapes does Bailey have than Jonathan?																																																												
Count by 2's. 88, 90, 92, _____, _____	True or False? $15 = 8 + 7$ _____	Count by 10's. 40, 50, 60, _____, _____	True or False? $6 + 3 + 4 = 12$ _____																																																												
Solve. $\begin{array}{r} 2 \\ + 8 \\ \hline \end{array}$ $\begin{array}{r} 15 \\ - 9 \\ \hline \end{array}$ $\begin{array}{r} 14 \\ + 3 \\ \hline \end{array}$	Find the missing number. $12 - \square = 5$	Solve. $\begin{array}{r} 5 \\ + 3 \\ \hline \end{array}$ $\begin{array}{r} 17 \\ - 12 \\ \hline \end{array}$ $\begin{array}{r} 8 \\ + 9 \\ \hline \end{array}$	Find the missing number. $\square - 8 = 3$																																																												
Use $>$, $<$, or $=$ to compare the numbers. $56 \bigcirc 28$	Write the number. <div style="text-align: center; margin: 10px 0;"> <table border="1" style="display: inline-table; border-collapse: collapse;"> <thead> <tr> <th style="padding: 2px 10px;">Tens</th> <th style="padding: 2px 10px;">Ones</th> </tr> </thead> <tbody> <tr> <td style="text-align: center; padding: 10px 10px;">  </td> <td style="text-align: center; padding: 10px 10px;">  </td> </tr> </tbody> </table> </div> _____	Tens	Ones			Use $>$, $<$, or $=$ to compare the numbers. $40 \bigcirc 40$	82 How many tens? _____ How many ones? _____																																																								
Tens	Ones																																																														
																																																															
Add $28 + 5$ <div style="text-align: center; margin: 10px 0;">  </div>	Add $38 + 4$	Add $47 + 30$ <div style="text-align: center; margin: 10px 0;">  </div>	Add $56 + 20$																																																												
Circle the number that is 10 more than 37. <table border="1" style="width: 100%; text-align: center; border-collapse: collapse;"> <tr><td>21</td><td>22</td><td>23</td><td>24</td><td>25</td><td>26</td><td>27</td><td>28</td><td>29</td><td>30</td></tr> <tr><td>31</td><td>32</td><td>33</td><td>34</td><td>35</td><td>36</td><td>37</td><td>38</td><td>39</td><td>40</td></tr> <tr><td>41</td><td>42</td><td>43</td><td>44</td><td>45</td><td>46</td><td>47</td><td>48</td><td>49</td><td>50</td></tr> </table>	21	22	23	24	25	26	27	28	29	30	31	32	33	34	35	36	37	38	39	40	41	42	43	44	45	46	47	48	49	50	Circle the number that is 10 less than 71. <table border="1" style="width: 100%; text-align: center; border-collapse: collapse;"> <tr><td>61</td><td>62</td><td>63</td><td>64</td><td>65</td><td>66</td><td>67</td><td>68</td><td>69</td><td>70</td></tr> <tr><td>71</td><td>72</td><td>73</td><td>74</td><td>75</td><td>76</td><td>77</td><td>78</td><td>79</td><td>80</td></tr> <tr><td>81</td><td>82</td><td>83</td><td>84</td><td>85</td><td>86</td><td>87</td><td>88</td><td>89</td><td>90</td></tr> </table>	61	62	63	64	65	66	67	68	69	70	71	72	73	74	75	76	77	78	79	80	81	82	83	84	85	86	87	88	89	90	What is... 35 One more _____ One less _____ Ten more _____ Ten less _____	What is... 28 One more _____ One less _____ Ten more _____ Ten less _____
21	22	23	24	25	26	27	28	29	30																																																						
31	32	33	34	35	36	37	38	39	40																																																						
41	42	43	44	45	46	47	48	49	50																																																						
61	62	63	64	65	66	67	68	69	70																																																						
71	72	73	74	75	76	77	78	79	80																																																						
81	82	83	84	85	86	87	88	89	90																																																						

My Work

Monday	Tuesday
Wednesday	Thursday

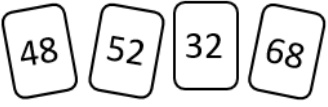

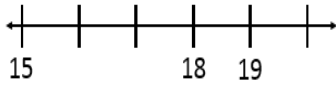

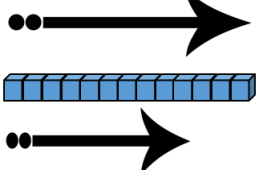
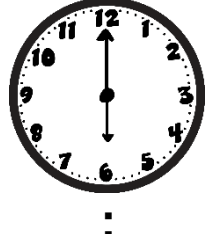
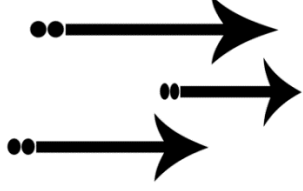

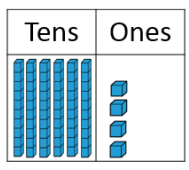
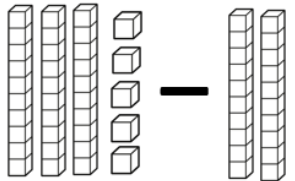
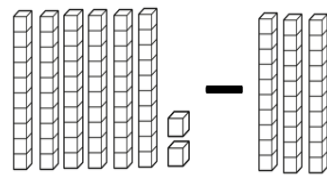
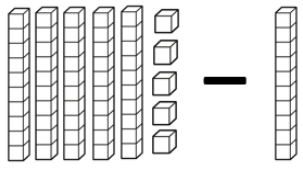
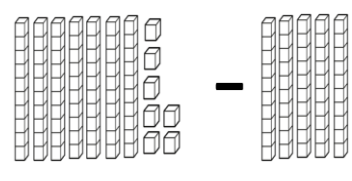
My Progress

MONDAY Out of _____ questions, I got _____ correct.	TUESDAY Out of _____ questions, I got _____ correct.	WEDNESDAY Out of _____ questions, I got _____ correct.	THURSDAY Out of _____ questions, I got _____ correct.
--	---	---	--

Name: _____

Weekly Math Review - Q4:5

Date: _____

Monday	Tuesday	Wednesday	Thursday
Put the number cards in order from least to greatest.  _____	Name the shape  _____ How many? sides _____ points _____	Fill in the missing numbers on the number line. 	Cut the candy bar so you and your 3 friends can share it equally. 
Circle the arrow that is 10 cubes long. 	What time is it? 	Order the arrows from shortest to longest. 	Draw the hands on the clock to show 1.30 
Emma has some colored pencils. She loses 3 of them. Now she has 8 colored pencils. How many did Emma have at the beginning?	There are 3 green cars, 6 white cars, and 7 yellow cars. How many cars are there altogether?	Timothy ate 12 mango slices, and 8 pieces of watermelon. How many more pieces of mango than watermelon did Timothy eat?	Grace has 3 dogs, 2 cats, and 12 fish. How many pets did Grace have altogether?
Count by 2's. 94, 96, 98, _____, _____	True or False? $7 + 7 = 15$ _____	Count by 10's. 70, 80, 90, _____, _____	True or False? $8 = 17 - 9$ _____
Solve. $\begin{array}{r} 8 \\ + 6 \\ \hline \end{array}$ $\begin{array}{r} 13 \\ - 10 \\ \hline \end{array}$ $\begin{array}{r} 13 \\ + 7 \\ \hline \end{array}$	Find the missing number. $17 - \square = 9$	Solve. $\begin{array}{r} 1 \\ + 8 \\ \hline \end{array}$ $\begin{array}{r} 15 \\ - 11 \\ \hline \end{array}$ $\begin{array}{r} 9 \\ + 9 \\ \hline \end{array}$	Find the missing number. $\square - 5 = 8$
Use $>$, $<$, or $=$ to compare the numbers. $70 \bigcirc 30$	Write the number. 	Use $>$, $<$, or $=$ to compare the numbers. $51 \bigcirc 55$	67 How many tens? _____ How many ones? _____
What is... 39 One more _____ One less _____ Ten more _____ Ten less _____	Add $65 + 6$	What is... 93 One more _____ One less _____ Ten more _____ Ten less _____	Add $23 + 40$
Subtract $35 - 20$ 	Subtract $62 - 30$ 	Subtract $55 - 10$ 	Subtract $77 - 50$ 

My Work

Monday	Tuesday
Wednesday	Thursday

My Progress

MONDAY Out of _____ questions, I got _____ correct.	TUESDAY Out of _____ questions, I got _____ correct.	WEDNESDAY Out of _____ questions, I got _____ correct.	THURSDAY Out of _____ questions, I got _____ correct.
--	---	---	--